

Directions: Decompose each number.

**it out!**



\_\_\_\_\_ + \_\_\_\_\_ + \_\_\_\_\_



\_\_\_\_\_ + \_\_\_\_\_ + \_\_\_\_\_



\_\_\_\_\_ + \_\_\_\_\_ + \_\_\_\_\_



\_\_\_\_\_ + \_\_\_\_\_ + \_\_\_\_\_



\_\_\_\_\_ + \_\_\_\_\_ + \_\_\_\_\_

Directions: Decompose each number.

**it out!**



\_\_\_\_\_ + \_\_\_\_\_ + \_\_\_\_\_



\_\_\_\_\_ + \_\_\_\_\_ + \_\_\_\_\_



\_\_\_\_\_ + \_\_\_\_\_ + \_\_\_\_\_



\_\_\_\_\_ + \_\_\_\_\_ + \_\_\_\_\_




\_\_\_\_\_ + \_\_\_\_\_ + \_\_\_\_\_

Directions: Decompose each number.


it out!




$$\underline{500} + \underline{40} + \underline{7}$$



$$\underline{300} + \underline{90} + \underline{2}$$



$$\underline{100} + \underline{30} + \underline{5}$$




$$\underline{500} + \underline{10} + \underline{8}$$





$$\underline{200} + \underline{0} + \underline{3}$$


Directions: Decompose each number.


**it out!**


$$\underline{800} + \underline{20} + \underline{3}$$


$$\underline{200} + \underline{70} + \underline{7}$$


$$\underline{200} + \underline{0} + \underline{2}$$


$$\underline{600} + \underline{20} + \underline{0}$$


$$\underline{500} + \underline{70} + \underline{3}$$

